

Name		Roll Number	
------	--	-------------	--



INDIAN SCHOOL MUSCAT
MIDDLE SECTION
FINAL EXAMINATION 2017-18



SOCIAL SCIENCE

Code: MWSS02/03

CLASS: V

Time Allotted: 2 ½ Hrs.

15.03.2018

Max .Marks: 80

General Instructions:

1. The question paper comprises of **two Sections, A and B**. You have to attempt both the sections.
2. **All** questions are **compulsory**.
3. **All answers should be written in the answer sheet provided.**
4. Map to be **attached** with the answer sheet.

SECTION A (OBJECTIVE)

Qns Marks

1. **NAME THE FOLLOWING WITH APPROPRIATE ANSWERS:** **1×5=5**

- a. A substance that is put into the blood and protects the body from an illness_____
- b. Electricity produced by using the force of flowing water as in dams_____
- c. Someone who wants to change and improve something in the society_____
- d. A group of people chosen to do a particular job_____
- e. A newspaper called Kesari was started by him_____

2. **FILL IN THE BLANKS WITH APPROPRIATE ANSWER:** **1×5=5**

- a. The first European to find a sea route to India was the Portuguese explorer_____
- b. _____is a medical treatment that involves cutting open a part of the body.
- c. The British formed the _____ India Company in the year 1600 for trading in India.
- d. The _____ policy of the British had been successful in dividing the Hindus and the Muslims of India.
- e. _____introduced the method of Satyagraha in India and we gained freedom.




3. **STATE WHETHER THE STATEMENTS ARE TRUE OR FALSE:** 1×5=5

- a. Patriotism is the strong feeling of love, respect and loyalty towards another country.
- b. In 1905, the British decided to divide Bengal into two based on religion.
- c. India got her independence on 15th August 1948.
- d. Under Rowlatt Act British could arrest anyone without a trial.
- e. The Union government is also known as the central government




4. **CHOOSE THE CORRECT ANSWER FROM THE OPTIONS:** 1×5=5

- a. Which of these is used to measure body temperature?
clinical thermometer, stethoscope, microscope
- b. In which country the Industrial Revolution began?
Britain, India, Germany
- c. Which source of energy does not cause pollution?
coal, petrol, solar
- d. The Indian soldier who started the revolt against the British was
Tantia Tope, Nana Saheb, Mangal Pandey
- e. He ensures the smooth proceedings of Lok Sabha
President, Prime Minister, Speaker.

5. **IDENTIFY THE PERSONALITIES AND ANSWER THE FOLLOWING:** 1×3=3

 <p>a)_____ fought and won battle against slavery in U.S.A</p>	 <p>b)_____ used Gandhiji's non-violent methods of protest to win equality for the blacks in U.S.A</p>	 <p>c)_____ is remembered for her selfless service to the poor people of Kolkata.</p>
---	---	--

6. **OBSERVE THE EMBLEMS AND WRITE THE FULL FORM OF THE AGENCIES OF UN:** **1×3=3**

 <p>a) UNICEF_____</p>	 <p>b) FAO_____</p>	 <p>c) WHO_____</p>
---	--	--

7. **ON THE GIVEN OUTLINE MAP OF DRC, MARK AND LABEL THE FOLLOWING:** **1×2=2**

a) Kinshasa b) Equator

8. **ON THE GIVEN MAP OF SAUDI ARABIA, MARK AND LABEL THE FOLLOWING:** **1×2=2**

a) Riyadh b) Tropic of Cancer

SECTION B (SUBJECTIVE)

9. **ANSWER THE FOLLOWING IN ONE POINT:** **1×13=13**

- a. What did Gandhiji do as soon as he came back to India?
- b. Write any one function of F.A.O.?
- c. Who are extremists?
- d. What is the meaning of 'Swadeshi'?
- e. What is Constitution?
- f. What do you understand by Government?
- g. Why did the Arabs and Europeans trade with India?
- h. Write any one reason which helped the British to crush the Revolt of 1857?
- i. Explain the term 'Satyagraha'?
- j. When and where was Mahatma Gandhi born?
- k. How is Coal formed?
- l. Why did Indians boycott Simon Commission?
- m. What is Pasteurization?

10. **ANSWER THE FOLLOWING IN TWO POINTS:**

2x7=14

- a. How does a Stethoscope help the Doctors?
- b. Write a short note on Gandhiji's Dandi March?
- c. What do you know about Martin Luther King's protest march in Alabama?
- d. Who were Revolutionaries?
- e. Write any two features of Parliament?
- f. Why is discovery of iron considered to be very important in the history of humans?
- g. Describe the Injustice done by the British to the Indian weavers and handloom industry

11. **ANSWER THE FOLLOWING QUESTION IN THREE POINTS:**

1x3=3

Write any three achievements of UN.

OR

What do you know about ECOSOC?

12. **ANSWER THE FOLLOWING IN FOUR POINTS:**

4x5=20

- A. Mention the reasons of discontent among the Indians during the East India Company rule.
- B. British divided Bengal in 1905. Why?
- C. Discuss Jallianwala Bagh massacre.
- D. Write a short note on U.N. General Assembly?
OR
Discuss the functions of WHO?
- E. Briefly write about Mother Teresa.
OR
Why did many people of Southern States dislike Abraham Lincoln?